

# Review for FINAL EXAM

---

---

---

---

---

---

---

---

## Chapter 1

### Population

the complete collection of elements (scores, people, measurements, etc.) to be studied

### Sample

a sub-collection of elements drawn from a population

---

---

---

---

---

---

---

---

## The Nature of Data

### Definitions

#### Quantitative data

numbers representing counts or measurements

#### Qualitative (attribute) data

nonnumeric data that can be separated into different categories (categorical data)

---

---

---

---

---

---

---

---

# Definitions

**Discrete - Countable**

**Continuous - Measurements with no gaps**

---

---

---

---

---

---

---

---

# Levels of Measurement

**Nominal - names only**

**Ordinal - names with some order**

**Interval - differences but no 'zero'**

**Ratio - differences and a 'zero'**

---

---

---

---

---

---

---

---

# Methods of Sampling

**Random**

**Systematic**

**Convenience**

**Stratified**

**Cluster**

---

---

---

---

---

---

---

---

# Chapters 2,3

---

---

---

---

---

---

---

---

## Determine the Definition Values for this Frequency Table

Quiz Scores	Frequency
0-4	2
5-9	5
10-14	8
15-19	11
20-24	7

- ❖ **Classes**
- ❖ **Lower Class Limits**
- ❖ **Upper Class Limits**
- ❖ **Class Boundaries**
- ❖ **Class Midpoints**
- ❖ **Class Width**

---

---

---

---

---

---

---

---

## Frequency Tables

Regular Freq. Table		Relative Freq. Table		Cumulative Freq. Table	
Axial Load	Frequency	Axial Load	Relative Frequency	Axial Load	Cumulative Frequency
200 - 209	9	200 - 209	0.051	Less than 210	9
210 - 219	3	210 - 219	0.017	Less than 220	12
220 - 229	5	220 - 229	0.029	Less than 230	17
230 - 239	4	230 - 239	0.023	Less than 240	21
240 - 249	4	240 - 249	0.023	Less than 250	25
250 - 259	14	250 - 259	0.080	Less than 260	39
260 - 269	32	260 - 269	0.183	Less than 270	71
270 - 279	52	270 - 279	0.297	Less than 280	123
280 - 289	38	280 - 289	0.217	Less than 290	161
290 - 299	14	290 - 299	0.080	Less than 300	175

---

---

---

---

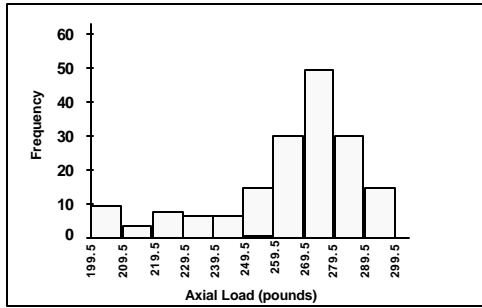
---

---

---

---

## Histogram of Axial Load Data



Final Review. Triola, Essentials of Statistics, Third Edition. Copyright 2008. Pearson Education, Inc.

10

---

---

---

---

---

---

---

---

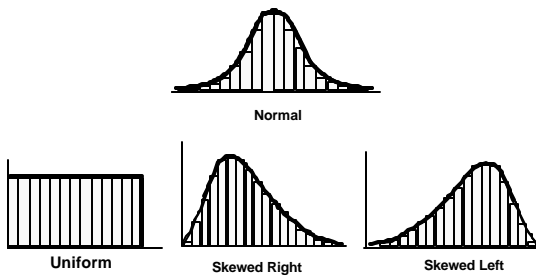
---

---

---

---

## Important Distributions



Final Review. Triola, Essentials of Statistics, Third Edition. Copyright 2008. Pearson Education, Inc.

11

---

---

---

---

---

---

---

---

---

---

---

---

## Stem-Leaf Plots

10 11 15 23 27 28 38 38 39 39  
40 41 44 45 46 46 52 57 58 65

Stem	Leaves
1	015
2	378
3	8899
4	014566
5	278
6	5

Final Review. Triola, Essentials of Statistics, Third Edition. Copyright 2008. Pearson Education, Inc.

12

---

---

---

---

---

---

---

---

---

---

---

---

## Measures of Center

Mean

Median

Mode

Midrange

Final Review. Triola, Essentials of Statistics, Third Edition. Copyright 2008. Pearson Education, Inc.

13

---

---

---

---

---

---

---

---

## Calculator Basics for Statistical Data

1. Put calculator into statistical mode
2. Clear previous data
3. Enter data (and frequency)
4. Select key(s) that calculate  $\bar{x}$

Final Review. Triola, Essentials of Statistics, Third Edition. Copyright 2008. Pearson Education, Inc.

14

---

---

---

---

---

---

---

---

## Mean for a Frequency Table

$\bar{x} = 14.4$   
(rounded to one more decimal place than data)

Quiz Scores	Midpoints	Frequency
0-4	2	2
5-9	7	5
10-14	12	8
15-19	17	11
20-24	22	7

Final Review. Triola, Essentials of Statistics, Third Edition. Copyright 2008. Pearson Education, Inc.

15

---

---

---

---

---

---

---

---

# Measure of Variation

## Range

**highest score** – **lowest score**

---

---

---

---

---

---

---

---

# Measure of Variation

## Standard Deviation

a measure of variation of the scores  
about the mean

(average deviation from the mean)

---

---

---

---

---

---

---

---

# Measure of Variation

## Variance

standard deviation squared

---

---

---

---

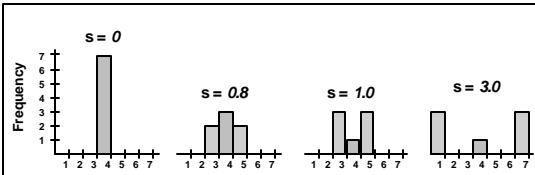
---

---

---

---

## Same Means ( $\bar{x} = 4$ ) Different Standard Deviations



Standard Deviation

---

---

---

---

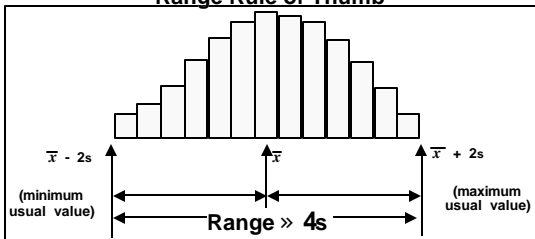
---

---

---

---

## Estimation of Standard Deviation Range Rule of Thumb



$$s \gg \frac{\text{Range}}{4} = \frac{\text{highest value} - \text{lowest value}}{4}$$

---

---

---

---

---

---

---

---

## Rough Estimates of Usual Sample Values

minimum 'usual' value  $\gg$  (mean) - 2 (standard deviation)

$$\text{minimum} \gg \bar{x} - 2(s)$$

maximum 'usual' value  $\gg$  (mean) + 2 (standard deviation)

$$\text{maximum} \gg \bar{x} + 2(s)$$

---

---

---

---

---

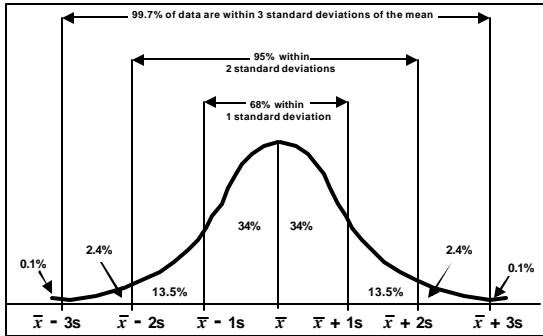
---

---

---

## The Empirical Rule (applies to bell-shaped distributions)

FIGURE 2-13



Final Review, Triola, Essentials of Statistics, Third Edition, Copyright 2008, Pearson Education, Inc.

22

---

---

---

---

---

---

---

---

---

---

## Measures of Position z score

Sample

Population

$$z = \frac{x - \bar{x}}{s}$$

$$z = \frac{x - \mu}{S}$$

Round to 2 decimal places

Final Review, Triola, Essentials of Statistics, Third Edition, Copyright 2008, Pearson Education, Inc.

23

---

---

---

---

---

---

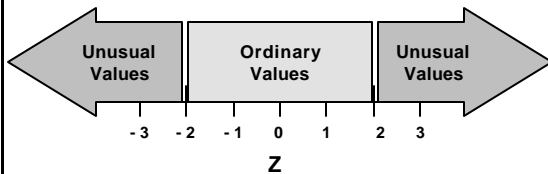
---

---

---

---

## Interpreting Z Scores



Final Review, Triola, Essentials of Statistics, Third Edition, Copyright 2008, Pearson Education, Inc.

24

---

---

---

---

---

---

---

---

---

---

# Other Measures of Position

## Quartiles and Percentiles

---

---

---

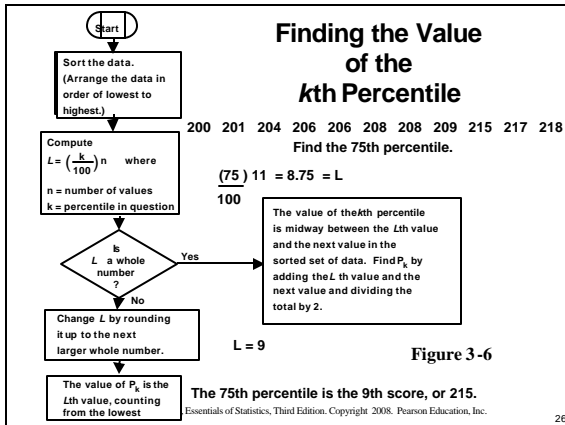
---

---

---

---

---




---

---

---

---

---

---

---

---

# Quartiles

$$Q_1 = P_{25}$$

$$Q_2 = P_{50}$$

$$Q_3 = P_{75}$$

---

---

---

---

---

---

---

---

# Boxplot

pulse rates (beats per minute) of smokers

52 52 60 60 60 60 63 63 66 67 68  
69 71 72 73 75 78 80 82 83 88 90

5 - number summary

- ❖ Minimum - 52
- ❖ first quartile Q1 - 60
- ❖ Median - 68.5
- ❖ third quartile Q3 - 78
- ❖ Maximum - 90

---

---

---

---

---

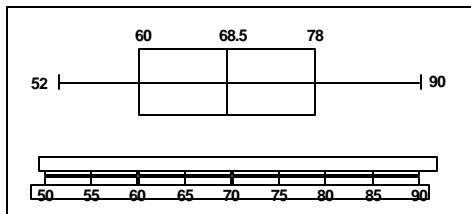
---

---

---

# Boxplot

Box-and-Whisker Diagram



Boxplot of Pulse Rates (Beats per minute) of Smokers

---

---

---

---

---

---

---

---

# Chapters 4 and 5

---

---

---

---

---

---

---

---

# Fundamentals of Probability

---

---

---

---

---

---

---

---

## Basic Rules for Computing Probability

### Rule 1: Relative Frequency Approximation

Conduct (or observe) an experiment a large number of times, and count the number of times event A actually occurs, then an estimate of  $P(A)$  is

$$P(A) \sim \frac{\text{number of times A occurred}}{\text{number of times trial was repeated}}$$

---

---

---

---

---

---

---

---

## Basic Rules for Computing Probability

### Rule 2: Classical approach

(requires equally likely outcomes)

If a procedure has  $n$  different simple events, each with an equal chance of occurring, and event A can occur in  $s$  of these ways, then

$$P(A) = \frac{s}{n} = \frac{\text{number of ways A can occur}}{\text{number of different simple events}}$$

---

---

---

---

---

---

---

---

**Rule 1**  
**Relative frequency approach**  
**Throwing a die 100 times and getting**  
**15 threes**  
 **$P(3) = 0.150$**

**Rule 2**  
**Classical approach**  
 **$P(3 \text{ on a die}) = 1/6 = 0.167$**

---

---

---

---

---

---

---

---

## Probability Limits

- ❖ The probability of an impossible event is 0.
- ❖ The probability of an event that is certain to occur is 1.

**0** £  **$P(A)$**  £ **1**

↓  
Impossible  
to occur

↓  
Certain  
to occur

- ❖ A probability value must be a number between 0 and 1.

---

---

---

---

---

---

---

---

## Complementary Events

The complement of event  $A$ , denoted by  $\bar{A}$ , consists of all outcomes in which event  $A$  does not occur.

**$P(A)$**

**$P(\bar{A})$**   
(read “not  $A$ ”)

---

---

---

---

---

---

---

---

## Rounding Off Probabilities

❖ give the exact fraction or decimal

or

❖ round the final result to  
three significant digits

$P(\text{struck by lightning last year}) \gg 0.00000143$

---

---

---

---

---

---

---

---

## Definitions

### Compound Event

Any event combining 2 or more  
events

### Notation

$P(A \text{ or } B) = P(\text{event A occurs or  
event B occurs or they  
both occur})$

---

---

---

---

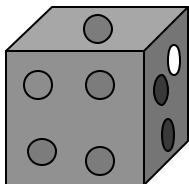
---

---

---

---

## Disjoint Events



A = Green ball } disjoint  
B = Blue ball } events

$$P(A \text{ or } B) = P(A) + P(B) = \frac{4}{8} + \frac{1}{8} = \frac{5}{8}$$

---

---

---

---

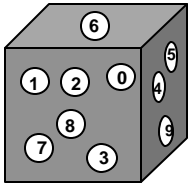
---

---

---

---

## Not Disjoint Events



A = Even number  
 B = Number greater than 5 } **Overlapping events; some counted twice**

$$P(A \text{ or } B) = P(A) + P(B) - P(A \text{ and } B) =$$

$$\frac{5}{10} + \frac{4}{10} - \frac{2}{10} = \frac{7}{10}$$

0 2 4 6 8   
 6 7 8 9   
 6 & 8

Final Review, Triola, Essentials of Statistics, Third Edition, Copyright 2008, Pearson Education, Inc. **Counted twice**

40

---

---

---

---

---

---

---

---

## Contingency Table

	Homicide	Robbery	Assault	Totals
Stranger	12	379	727	1118
Acqu. or Rel.	39	106	642	787
Unknown	18	20	57	95
Totals	69	505	1426	2000

Find the probability of randomly selecting one person from this group and getting someone who was robbed or was a stranger.

$$P(\text{robbed or a stranger}) = \frac{.505 + 1118 - 379}{2000} = \frac{1244}{2000} = 0.622$$

\*\* NOT Disjoint Events \*\*

Final Review, Triola, Essentials of Statistics, Third Edition, Copyright 2008, Pearson Education, Inc.

41

---

---

---

---

---

---

---

---

## Complementary Events

$P(A)$  and  $P(\bar{A})$   
 are  
 disjoint events

All simple events are either in A or  $\bar{A}$ .

$$P(A) + P(\bar{A}) = 1$$

Final Review, Triola, Essentials of Statistics, Third Edition, Copyright 2008, Pearson Education, Inc.

42

---

---

---

---

---

---

---

---

## Finding the Probability of Two or More Selections

- ❖ Multiple selections
- ❖ Multiplication Rule

---

---

---

---

---

---

---

---

## Definitions

### Independent Events

Two events A and B are independent if the occurrence of one does not affect the probability of the occurrence of the other.

### Dependent Events

If A and B are not independent, they are said to be dependent.

---

---

---

---

---

---

---

---

Find the probability of drawing two cards from a shuffled deck of cards such that the first is an Ace and the second is a King. (The cards are drawn without replacement.)

•  $P(\text{Ace on first card}) = \frac{4}{52}$

•  $P(\text{King} | \text{Ace}) = \frac{4}{51}$

•  $P(\text{drawing Ace, then a King}) = \frac{4}{52} \cdot \frac{4}{51} = \frac{16}{2652}$   
 $= 0.00603$

## DEPENDENT EVENTS

---

---

---

---

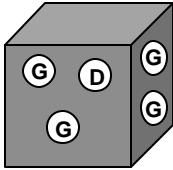
---

---

---

---

## Independent Events



- Two selections
- With replacement

P (both good) =

P (good and good) =

$$\frac{4}{5} \cdot \frac{4}{5} = \frac{16}{25} = 0.64$$

Final Review. Triola, Essentials of Statistics, Third Edition. Copyright 2008. Pearson Education, Inc.

46

---

---

---

---

---

---

---

---

**Example:** On a TV program it was reported that there is a 60% success rate for those who try to stop smoking through hypnosis. Find the probability that for 8 randomly selected smokers who undergo hypnosis, they all successfully quit smoking.

P(all 8 quit smoking) =

P(quit) P(quit) P(quit) P(quit) P(quit) P(quit) P(quit) P(quit) =  
(0.60) • (0.60) • (0.60) • (0.60) • (0.60) • (0.60) • (0.60) • (0.60)

or

$$0.60^8 = 0.0168$$

Final Review. Triola, Essentials of Statistics, Third Edition. Copyright 2008. Pearson Education, Inc.

47

---

---

---

---

---

---

---

---

## Small Samples from Large Populations

If small sample is drawn from large population (if  $n \leq 5\%$  of  $N$ ), you can treat the events as independent.

Final Review. Triola, Essentials of Statistics, Third Edition. Copyright 2008. Pearson Education, Inc.

48

---

---

---

---

---

---

---

---

# Chapter 4

---

---

---

---

---

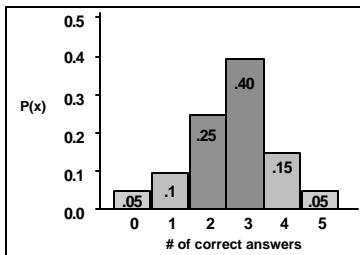
---

---

---

## Probability Distribution

$x$ (# of correct)	$P(x)$
0	.05
1	.10
2	.25
3	.40
4	.15
5	.05



Probability Histogram

---

---

---

---

---

---

---

---

## Requirements for Probability Distribution

$$\sum P(x) = 1$$

where  $x$  assumes all possible values

$$0 \leq P(x) \leq 1$$

for every value of  $x$

---

---

---

---

---

---

---

---

## Mean, Variance and Standard Deviation of a Probability Distribution

### Mean

$$\mu = \sum x \cdot P(x)$$

### Variance

$$S^2 = \sum [x^2 \cdot P(x)] - \mu^2$$

### Standard Deviation

$$S = \sqrt{\sum [x^2 \cdot P(x)] - \mu^2}$$

---

---

---

---

---

---

---

---

## Mean, Standard Deviation and Variance of Probability Distribution

$x$	$P(x)$
0	.05
1	.10
2	.25
3	.40
4	.15
5	.05

$$\mu = 2.7$$

$$S = 1.2$$

$$S^2 = 1.3$$

---

---

---

---

---

---

---

---

## Binomial Experiment

### Definition

1. The procedure must have a *fixed number of trials*.
2. The trials must be *independent*. (The outcome of any individual trial doesn't affect the probabilities in the other trials.)
3. Each trial must have all outcomes classified into *two categories*.
4. The probabilities must remain *constant* for each trial.

---

---

---

---

---

---

---

---

## Binomial Probability Formula

$$P(x) = \frac{n!}{(n-x)!x!} \cdot p^x \cdot q^{n-x}$$

---

---

---

---

---

---

---

---

---

---

**For  $n = 15$  and  $p = 0.10$**

Table A-1 Binomial Probability Distribution

$n$	$x$	$P(x)$		$x$	$P(x)$
15	0	0.206		0	0.206
	1	0.343		1	0.343
	2	0.267		2	0.267
	3	0.129		3	0.129
	4	0.043		4	0.043
	5	0.010		5	0.010
	6	0.002		6	0.002
	7	0.0+	→	7	0.000
	8	0.0+		8	0.000
	9	0.0+		9	0.000
	10	0.0+		10	0.000
	11	0.0+		11	0.000
	12	0.0+		12	0.000
	13	0.0+		13	0.000
	14	0.0+		14	0.000
	15	0.0+		15	0.000

---

---

---

---

---

---

---

---

---

---

**Example:** US Air has 20% of all domestic flights and one year had 4 of 7 consecutive major air crashes in the United States. Assuming that airline crashes are independent and random events, find the probability that when seven airliners crash, at least four of them are from US Air.

According to the definition, this is a binomial experiment.

$n = 7$

$p = 0.20$

$q = 0.80$

$x = 4, 5, 6, 7$

Table A1 can be used.

$P(4,5,6,7) = 0.029 + 0.004 + 0^+ + 0^+ = 0.033$

---

---

---

---

---

---

---

---

---

---

## Binomial Probability Formula

$$P(x) = \underbrace{{}_n C_x}_{\substack{\text{Number of} \\ \text{outcomes with} \\ \text{exactly } x \\ \text{successes} \\ \text{among } n \text{ trials}}} \cdot \underbrace{p^x \cdot q^{n-x}}_{\substack{\text{Probability of } x \\ \text{successes} \\ \text{among } n \text{ trials} \\ \text{for any one} \\ \text{particular order}}}$$

---

---

---

---

---

---

---

---

**Example:** Find the probability of getting exactly 3 left-handed students in a class of 20 if 10% of us are left-handed.

This is a binomial experiment where:

$$n = 20$$

$$x = 3$$

$$p = .10$$

$$q = .90$$

Table A-1 cannot be used; therefore, we must use the binomial formula.

$$P(3) = {}_{20}C_3 \cdot 0.1^3 \cdot 0.9^{17} = 0.190$$

---

---

---

---

---

---

---

---

**For a Binomial Distribution:**

**Mean**       $\mu = n \cdot p$

**Variance**     $S^2 = n \cdot p \cdot q$

**Standard Deviation**     $S = \sqrt{n \cdot p \cdot q}$

---

---

---

---

---

---

---

---

**Example: US Air has 20% of all domestic flights. What is considered the 'unusual' number of US Air crashes out of seven randomly selected crashes?**

**We previously found for this binomial distribution,**

$$\mu = 1.4 \text{ crashes}$$

$$S = 1.1 \text{ crashes}$$

$$\mu - 2S = 1.4 - 2(1.1) = -0.8 \text{ (or 0)}$$

$$\mu + 2S = 1.4 + 2(1.1) = 3.6$$

The usual number of US Air crashes out of seven randomly selected crashes should be between -0.8 (or 0) and 3.6. Four crashes would be unusual!

---

---

---

---

---

---

---

---

## Chapter 6

### Normal Probability Distributions

---

---

---

---

---

---

---

---

## 6-2

### The Standard Normal Distribution

---

---

---

---

---

---

---

---

**Because the total area under the density curve is equal to 1, there is a correspondence between area and probability.**

---

---

---

---

---

---

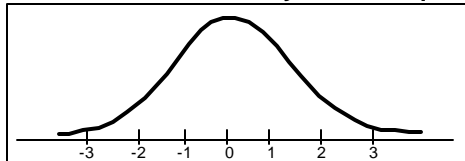
---

---

## Definition

### Standard Normal Distribution

a normal probability distribution that has a mean of 0 and a standard deviation of 1, and the total area under its density curve is equal to 1.




---

---

---

---

---

---

---

---

## NEGATIVE Z Scores Table A-2

**TABLE A-2** Standard Normal ( $Z$ ) Distribution: Cumulative Area from the LEFT

$z$	.00	.01	.02	.03	.04	.05	.06	.07	.08	.09
-3.0										
and lower	.0001									
-3.4	.0003	.0003	.0003	.0003	.0003	.0003	.0003	.0003	.0003	.0002
-3.3	.0005	.0005	.0005	.0004	.0004	.0004	.0004	.0004	.0004	.0003
-3.2	.0007	.0007	.0006	.0006	.0006	.0006	.0006	.0005	.0005	.0005
-3.1	.0010	.0009	.0009	.0009	.0008	.0008	.0008	.0008	.0007	.0007
-3.0	.0013	.0013	.0013	.0012	.0012	.0011	.0011	.0011	.0010	.0010
-2.9	.0016	.0016	.0016	.0015	.0015	.0014	.0014	.0014	.0013	.0013
-2.8	.0020	.0020	.0020	.0019	.0019	.0018	.0018	.0018	.0017	.0017
-2.7	.0025	.0025	.0025	.0024	.0024	.0023	.0023	.0023	.0022	.0022
-2.6	.0031	.0031	.0031	.0030	.0030	.0029	.0029	.0028	.0027	.0027
-2.5	.0038	.0038	.0038	.0037	.0037	.0036	.0036	.0035	.0035	.0034
-2.4	.0047	.0047	.0047	.0046	.0046	.0045	.0045	.0044	.0044	.0043
-2.3	.0057	.0057	.0057	.0056	.0056	.0055	.0055	.0054	.0054	.0053
-2.2	.0069	.0069	.0069	.0068	.0068	.0067	.0067	.0066	.0066	.0065
-2.1	.0082	.0082	.0082	.0081	.0081	.0080	.0080	.0079	.0079	.0078
-2.0	.0107	.0107	.0107	.0106	.0106	.0105	.0105	.0104	.0104	.0103
-1.9	.0139	.0139	.0139	.0138	.0138	.0137	.0137	.0136	.0136	.0135
-1.8	.0179	.0179	.0179	.0178	.0178	.0177	.0177	.0176	.0176	.0175
-1.7	.0238	.0238	.0238	.0237	.0237	.0236	.0236	.0235	.0235	.0234
-1.6	.0307	.0307	.0307	.0306	.0306	.0305	.0305	.0304	.0304	.0303
-1.5	.0389	.0389	.0389	.0388	.0388	.0387	.0387	.0386	.0386	.0385

---

---

---

---

---

---

---

---

## Table A-2

- ❖ Designed only for *standard* normal distribution
- ❖ Is on two pages: *negative z-scores* and *positive z-scores*
- ❖ Body of table is a cumulative area from the left up to a vertical boundary
- ❖ Avoid confusion between z-scores and areas
- ❖ Z-score hundredths is across the top row

Final Review. Triola, Essentials of Statistics, Third Edition. Copyright 2008. Pearson Education, Inc.

67

---

---

---

---

---

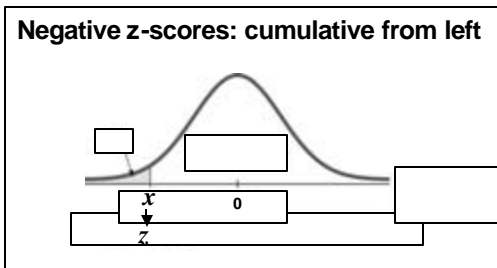
---

---

---

## Table A-2 Standard Normal Distribution

Negative z-scores: cumulative from left



Final Review. Triola, Essentials of Statistics, Third Edition. Copyright 2008. Pearson Education, Inc.

68

---

---

---

---

---

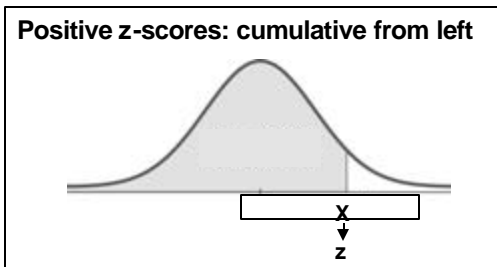
---

---

---

## Table A-2 Standard Normal Distribution

Positive z-scores: cumulative from left



Final Review. Triola, Essentials of Statistics, Third Edition. Copyright 2008. Pearson Education, Inc.

69

---

---

---

---

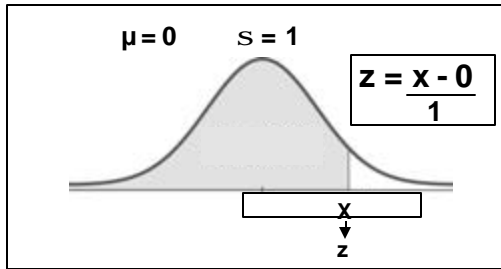
---

---

---

---

## Table A-2 Standard Normal Distribution



Final Review. Triola, Essentials of Statistics, Third Edition. Copyright 2008. Pearson Education, Inc.

70

---

---

---

---

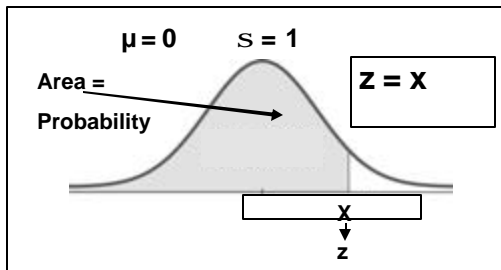
---

---

---

---

## Table A-2 Standard Normal Distribution



Final Review. Triola, Essentials of Statistics, Third Edition. Copyright 2008. Pearson Education, Inc.

71

---

---

---

---

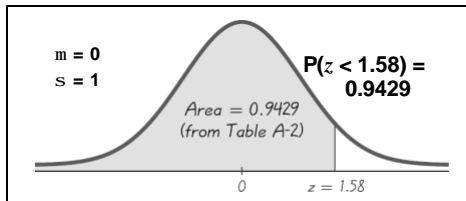
---

---

---

---

**Example:** If thermometers have an average (mean) reading of 0 degrees and a standard deviation of 1 degree for freezing water and if one thermometer is randomly selected, find the probability that it reads freezing water is less than 1.58 degrees.



94.29% of the thermometers will read freezing water less than 1.58 degrees.

Final Review. Triola, Essentials of Statistics, Third Edition. Copyright 2008. Pearson Education, Inc.

72

---

---

---

---

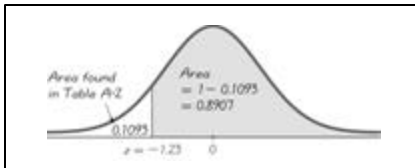
---

---

---

---

**Example:** If we are using the same thermometers, and if one thermometer is randomly selected, find the probability that it reads (at the freezing point of water) above  $-1.23$  degrees.  $P(z > -1.23) = 0.8907$



The percentage of thermometers with a reading above  $-1.23$  degrees is 89.07%.

---

---

---

---

---

---

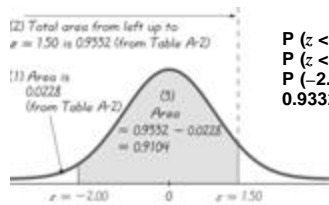
---

---

---

---

**Example:** A thermometer is randomly selected. Find the probability that it reads (at the freezing point of water) between  $-2.00$  and  $1.50$  degrees.



$P(z < -2.00) = 0.0228$   
 $P(z < 1.50) = 0.9332$   
 $P(-2.00 < z < 1.50) = 0.9332 - 0.0228 = 0.9104$

The probability that the chosen thermometer has a reading between  $-2.00$  and  $1.50$  degrees is 0.9104.

---

---

---

---

---

---

---

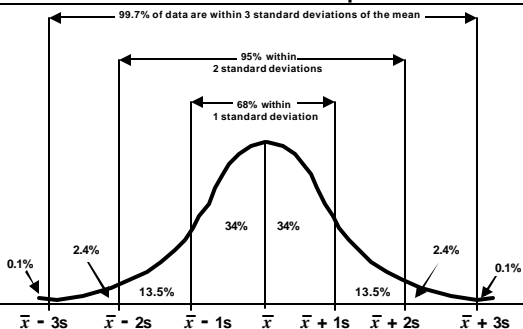
---

---

---

## The Empirical Rule

Standard Normal Distribution:  $\mu = 0$  and  $\sigma = 1$




---

---

---

---

---

---

---

---

---

---

# Notation

$P(a < z < b)$   
between  $a$  and  $b$

$P(z > a)$   
greater than, at least, more than,  
not less than

$P(z < a)$   
less than, at most, no more than,  
not greater than

---

---

---

---

---

---

---

---

## 6-3

# Applications of Normal Distributions

---

---

---

---

---

---

---

---

## Converting to Standard Normal Distribution

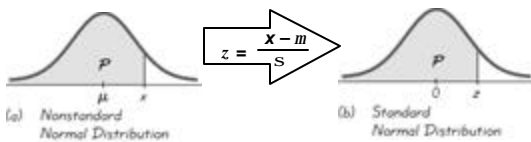


Figure 6-12

---

---

---

---

---

---

---

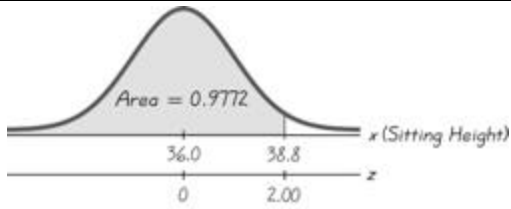
---

### Probability of Sitting Heights Less Than 38.8 Inches

$$m = 36.0$$

$$s = 1.4$$

$$z = \frac{38.8 - 36.0}{1.4} = 2.00$$




---

---

---

---

---

---

---

---

---

---

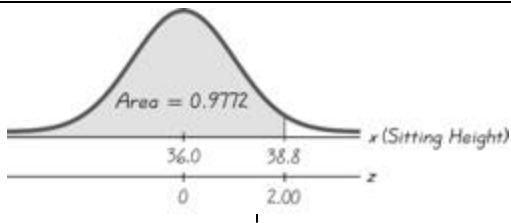
### Probability of Sitting Heights Less Than 38.8 Inches

$$m = 36.0$$

$$s = 1.4$$

$$P(x < 38.8 \text{ in.}) = P(z < 2)$$

$$= 0.9772$$




---

---

---

---

---

---

---

---

---

---

## 6.2 – 6.3

### Finding Values of Normal Distributions

---

---

---

---

---

---

---

---

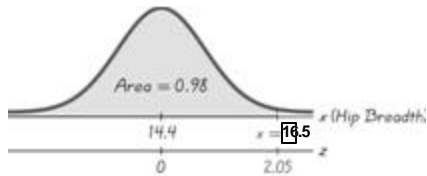
---

---



## Find $P_{98}$ for Hip Breadths of Men

The hip breadth of 16.5 in. separates the lowest 98% from the highest 2%



---

---

---

---

---

---

---

---

---

---

## 6-5

## The Central Limit Theorem

---

---

---

---

---

---

---

---

---

---

## Central Limit Theorem

### Conclusions:

1. The distribution of sample means  $\bar{x}$  will, as the sample size increases, approach a *normal* distribution.
2. The mean of the sample means will be the population mean  $\mu$ .
3. The standard deviation of the sample means will approach  $S/\sqrt{n}$ .

---

---

---

---

---

---

---

---

---

---

## Practical Rules Commonly Used:

1. For samples of size  $n$  larger than 30, the distribution of the sample means can be approximated reasonably well by a normal distribution. The approximation gets better as the sample size  $n$  becomes larger.
2. If the original population is itself normally distributed, then the sample means will be normally distributed for any sample size  $n$  (not just the values of  $n$  larger than 30).

---

---

---

---

---

---

---

---

## Notation

the mean of the sample means

$$\mu_{\bar{x}} = \mu$$

the standard deviation of sample means

$$S_{\bar{x}} = \frac{S}{\sqrt{n}}$$

(often called standard error of the mean)

---

---

---

---

---

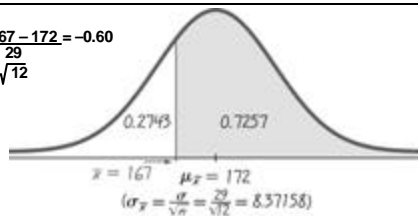
---

---

---

**Example:** Given the population of men has normally distributed weights with a mean of 172 lb. and a standard deviation of 29 lb,  
b.) if 12 different men are randomly selected, find the probability that their mean weight is greater than 167 lb.

$$z = \frac{167 - 172}{\frac{29}{\sqrt{12}}} = -0.60$$



---

---

---

---

---

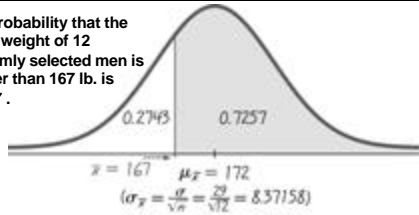
---

---

---

**Example:** Given the population of men has normally distributed weights with a mean of 172 lb. and a standard deviation of 29 lb,  
b.) if 12 different men are randomly selected, find the probability that their mean weight is greater than 167 lb.

The probability that the mean weight of 12 randomly selected men is greater than 167 lb. is 0.7257 .




---

---

---

---

---

---

---

---

---

---

---

---

## Chapter 7

# Estimates and Sample Sizes

---

---

---

---

---

---

---

---

---

---

---

---

## Definition

### Confidence Interval

(or Interval Estimate)

a range (or an interval) of values used to estimate the true value of the population parameter

Lower # < population parameter < Upper #

As an example

$$0.476 < p < 0.544$$

---

---

---

---

---

---

---

---

---

---

---

---

## Confidence Interval for Population Proportion

$$\hat{p} - E < p < \hat{p} + E$$

where

$$E = z_{\alpha/2} \sqrt{\frac{\hat{p}\hat{q}}{n}}$$

---

---

---

---

---

---

---

---

## Notation for Proportions

$p =$  population proportion

$\hat{p} = \frac{x}{n}$  sample proportion  
of  $x$  successes in a sample of size  $n$   
↑  
(pronounced 'p-hat')

$\hat{q} = 1 - \hat{p} =$  sample proportion  
of  $x$  failures in a sample size of  $n$

---

---

---

---

---

---

---

---

## Round-Off Rule for Confidence Interval Estimates of $p$

Round the confidence interval limits to three significant digits

---

---

---

---

---

---

---

---

### Procedure for Constructing a Confidence Interval for $p$

1. Verify that the required assumptions are satisfied. (The sample is a simple random sample, the conditions for the binomial distribution are satisfied, and the normal distribution can be used to approximate the distribution of sample proportions because  $np \geq 5$ , and  $nq \geq 5$  are both satisfied).
2. Refer to Table A-2 and find the critical value  $z_{\alpha/2}$  that corresponds to the desired confidence level.
3. Evaluate the margin of error  $E = \sqrt{\frac{\hat{p}\hat{q}}{n}}$

---

---

---

---

---

---

---

---

### Procedure for Constructing a Confidence Interval for $p$

4. Using the calculated margin of error,  $E$  and the value of the sample proportion,  $\hat{p}$ , find the values of  $\hat{p} - E$  and  $\hat{p} + E$ . Substitute those values in the general format for the confidence interval:

$$\hat{p} - E < p < \hat{p} + E$$

5. Round the resulting confidence interval limits to three significant digits.

---

---

---

---

---

---

---

---

**Example:** In the Chapter Problem, we noted that 829 adult Minnesotans were surveyed, and 51% of them are opposed to the use of the photo-cop for issuing traffic tickets. Use these survey results.

Find the 95% confidence interval estimate of the population proportion  $p$ .

---

---

---

---

---

---

---

---

**Example:** In the Chapter Problem, we noted that 829 adult Minnesotans were surveyed, and 51% of them are opposed to the use of the photo-cop for issuing traffic tickets. Use these survey results.

First, we check for assumptions. We note that  $n\hat{p} = 422.79 \geq 5$ , and  $n\hat{q} = 406.21 \geq 5$ .

Next, we calculate the margin of error. We have found that  $\hat{p} = 0.51$ ,  $\hat{q} = 1 - 0.51 = 0.49$ ,  $z_{\alpha/2} = 1.96$ , and  $n = 829$ .

$$E = 1.96 \sqrt{\frac{(0.51)(0.49)}{829}}$$
$$E = 0.03403$$

---

---

---

---

---

---

---

---

**Example:** In the Chapter Problem, we noted that 829 adult Minnesotans were surveyed, and 51% of them are opposed to the use of the photo-cop for issuing traffic tickets. Use these survey results.

Find the 95% confidence interval for the population proportion  $p$ .

We substitute our values from Part a to obtain:

$$0.51 - 0.03403 < p < 0.51 + 0.03403,$$
$$0.476 < p < 0.544$$

---

---

---

---

---

---

---

---

**Example:** In a given example, we noted that 829 adult Minnesotans were surveyed, and 51% of them are opposed to the use of the photo-cop for issuing traffic tickets. Use these survey results.

Based on the results, can we safely conclude that the majority of adult Minnesotans oppose use of the photo-cop?

Based on the survey results, we are 95% confident that the limits of 47.6% and 54.4% contain the true percentage of adult Minnesotans opposed to the photo-cop. The percentage of opposed adult Minnesotans is likely to be any value between 47.6% and 54.4%. However, a majority requires a percentage greater than 50%, so we *cannot* safely conclude that the majority is opposed (because the *entire* confidence interval is not greater than 50%).

---

---

---

---

---

---

---

---

# Estimating a Population Mean: S Not Known

---

---

---

---

---

---

---

---

---

---

# Confidence Interval for the Estimate of $\mu$

Based on an Unknown  $S$  and a Small Simple Random  
Sample from a Normally Distributed Population

$$\bar{x} - E < \mu < \bar{x} + E$$

where  $E = t_{\alpha/2} \frac{S}{\sqrt{n}}$

$t_{\alpha/2}$  found in Table A-3

---

---

---

---

---

---

---

---

---

---

**Table A-3  $t$  Distribution**

Degrees of freedom	.05 (one tail) 0.1 (two tails)	.025 (one tail) 0.05 (two tails)	.01 (one tail) 0.02 (two tails)	.005 (one tail) 0.01 (two tails)	.0025 (one tail) 0.005 (two tails)	.001 (one tail) 0.002 (two tails)	.0005 (one tail) 0.001 (two tails)
1	63.657	31.821	12.706	6.314	3.078	1.000	
2	9.925	6.965	4.303	2.920	1.886	.816	
3	5.841	4.541	3.182	2.353	1.638	.765	
4	4.604	3.747	2.776	2.132	1.533	.741	
5	4.032	3.365	2.571	2.015	1.476	.727	
6	3.707	3.143	2.447	1.943	1.440	.718	
7	3.500	2.998	2.365	1.895	1.415	.711	
8	3.355	2.896	2.306	1.860	1.397	.706	
9	3.250	2.821	2.262	1.833	1.383	.703	
10	3.169	2.764	2.228	1.812	1.372	.700	
11	3.106	2.718	2.201	1.796	1.363	.697	
12	3.054	2.681	2.179	1.782	1.356	.696	
13	3.012	2.650	2.160	1.771	1.350	.694	
14	2.977	2.625	2.145	1.761	1.345	.692	
15	2.947	2.602	2.132	1.753	1.341	.691	
16	2.921	2.584	2.120	1.746	1.337	.690	
17	2.898	2.567	2.110	1.740	1.333	.689	
18	2.878	2.552	2.101	1.734	1.330	.688	
19	2.861	2.540	2.093	1.729	1.328	.688	
20	2.845	2.528	2.086	1.725	1.325	.687	
21	2.831	2.518	2.080	1.721	1.323	.686	
22	2.819	2.508	2.074	1.717	1.321	.686	
23	2.807	2.500	2.069	1.714	1.320	.685	
24	2.797	2.492	2.064	1.711	1.318	.685	
25	2.787	2.485	2.060	1.708	1.316	.684	
26	2.779	2.479	2.056	1.706	1.315	.684	
27	2.771	2.473	2.052	1.703	1.314	.684	
28	2.763	2.467	2.048	1.701	1.313	.683	
29	2.756	2.462	2.045	1.699	1.311	.683	
30	2.750	2.457	2.042	1.697	1.310	.683	
Large ( $z$ )	2.575	2.327	1.960	1.645	1.282	.675	

---

---

---

---

---

---

---

---

---

---

**Example:** A study of 12 Dodge Vipers involved in collisions resulted in repairs averaging \$26,227 and a standard deviation of \$15,873. Find the 95% interval estimate of  $\mu$ , the mean repair cost for all Dodge Vipers involved in collisions. (The 12 cars' distribution appears to be bell-shaped.)

$$\bar{x} = 26,227 \quad E = t_{\alpha/2} \frac{S}{\sqrt{n}} = (2.201)(15,873) = 10,085.3$$

$$s = 15,873$$

$$\alpha = 0.05 \quad \bar{x} - E < \mu < \bar{x} + E$$

$$\alpha/2 = 0.025 \quad 26,227 - 10,085.3 < \mu < 26,227 + 10,085.3$$

$$t_{\alpha/2} = 2.201 \quad \$16,141.7 < \mu < \$36,312.3$$

We are 95% confident that this interval contains the average cost of repairing a Dodge Viper.

Final Review. Triola, Essentials of Statistics, Third Edition. Copyright 2008. Pearson Education, Inc.

10

---

---

---

---

---

---

---

---

---

---

---

---

## End of 7-2 and 7-3

### Determining Sample Size Required to Estimate

*p* and *m*

Final Review. Triola, Essentials of Statistics, Third Edition. Copyright 2008. Pearson Education, Inc.

10

---

---

---

---

---

---

---

---

---

---

---

---

### Sample Size for Estimating Proportion *p*

When an estimate of  $\hat{p}$  is known:

$$n = \frac{(z_{\alpha/2})^2 \hat{p} \hat{q}}{E^2} \quad \text{Formula 7-2}$$

When no estimate of  $\hat{p}$  is known:

$$n = \frac{(z_{\alpha/2})^2 0.25}{E^2} \quad \text{Formula 7-3}$$

Final Review. Triola, Essentials of Statistics, Third Edition. Copyright 2008. Pearson Education, Inc.

10

---

---

---

---

---

---

---

---

---

---

---

---

**Example:** We want to determine, with a margin of error of four percentage points, the current percentage of U.S. households using e-mail. Assuming that we want 90% confidence in our results, how many households must we survey? A 1997 study indicates 16.9% of U.S. households used e-mail.

$$\begin{aligned}
 n &= \frac{[z_{\alpha/2}]^2 \hat{p} \hat{q}}{E^2} \\
 &= \frac{[1.645]^2 (0.169)(0.831)}{0.04^2} \\
 &= 237.51965 \\
 &= 238 \text{ households}
 \end{aligned}$$

To be 90% confident that our sample percentage is within four percentage points of the true percentage for all households, we should randomly select and survey 238 households.

---

---

---

---

---

---

---

---

---

---

**Example:** We want to determine, with a margin of error of four percentage points, the current percentage of U.S. households using email. Assuming that we want 90% confidence in our results, how many households must we survey? There is no prior information suggesting a possible value for the sample percentage.

$$\begin{aligned}
 n &= \frac{[z_{\alpha/2}]^2 (0.25)}{E^2} \\
 &= \frac{(1.645)^2 (0.25)}{0.04^2} \\
 &= 422.81641 \\
 &= 423 \text{ households}
 \end{aligned}$$

With no prior information, we need a larger sample to achieve the same results with 90% confidence and an error of no more than 4%.

---

---

---

---

---

---

---

---

---

---

### Sample Size for Estimating Mean $m$

$$E = z_{\alpha/2} \cdot \sqrt{\frac{S}{n}}$$

(solve for  $n$  by algebra)

$$n = \left[ \frac{z_{\alpha/2} S}{E} \right]^2 \quad \text{Formula 7-5}$$

$z_{\alpha/2}$  = critical z score based on the desired degree of confidence

E = desired margin of error

S = population standard deviation

---

---

---

---

---

---

---

---

---

---

**Example:** If we want to estimate the mean weight of plastic discarded by households in one week, how many households must be randomly selected to be 99% confident that the sample mean is within 0.25 lb of the true population mean? (A previous study indicates the standard deviation is 1.065 lb.)

$\alpha = 0.01$   
 $z_{\alpha/2} = 2.575$   
 $E = 0.25$   
 $s = 1.065$

$$n = \left[ \frac{z_{\alpha/2} S}{E} \right]^2 = \left[ \frac{(2.575)(1.065)}{0.25} \right]^2 = 120.3 = 121 \text{ households}$$

We would need to randomly select 121 households and obtain the average weight of plastic discarded in one week. We would be 99% confident that this mean is within 1/4 lb of the population mean.

---

---

---

---

---

---

---

---

---

---

## Chapter 8

# Hypothesis Testing

---

---

---

---

---

---

---

---

---

---

**Claim:** Using math symbols

$H_0$ : Must contain equality

$H_1$ : Will contain  $\neq, <, >$

---

---

---

---

---

---

---

---

---

---

## Test Statistic

The test statistic is a value computed from the sample data, and it is used in making the decision about the rejection of the null hypothesis.

$$z = \frac{\hat{p} - p}{\sqrt{\frac{pq}{n}}}$$

Test statistic for proportions

---

---

---

---

---

---

---

---

## Test Statistic

The test statistic is a value computed from the sample data, and it is used in making the decision about the rejection of the null hypothesis.

$$t = \frac{\bar{x} - \mu_{\bar{x}}}{\frac{s}{\sqrt{n}}}$$

Test statistic for mean

---

---

---

---

---

---

---

---

## Test Statistic

The test statistic is a value computed from the sample data, and it is used in making the decision about the rejection of the null hypothesis.

$$c^2 = \frac{(n-1)s^2}{S^2}$$

Test statistic for standard deviation

---

---

---

---

---

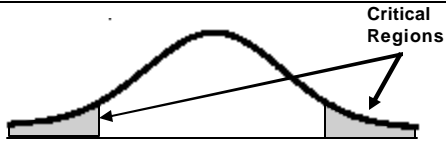
---

---

---

## Critical Region

Set of all values of the test statistic that would cause a rejection of the null hypothesis



---

---

---

---

---

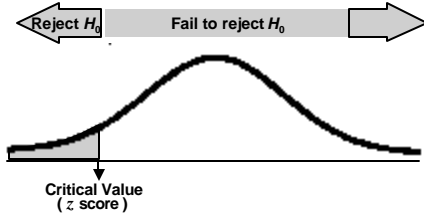
---

---

---

## Critical Value

Any value that separates the critical region (where we reject the null hypothesis) from the values of the test statistic that do not lead to a rejection of the null hypothesis



---

---

---

---

---

---

---

---

## Two-tailed, Right-tailed, Left-tailed Tests

The tails in a distribution are the extreme regions bounded by critical values.

---

---

---

---

---

---

---

---

## Decision Criterion

Traditional method:

**Reject  $H_0$**  if the test statistic falls within the critical region.

**Fail to reject  $H_0$**  if the test statistic does not fall within the critical region.

---

---

---

---

---

---

---

---

---

---

## Wording of Final Conclusion

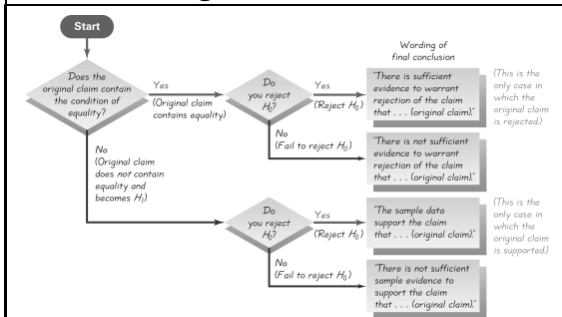


Figure 8-7

---

---

---

---

---

---

---

---

---

---

### Traditional Method

1. Identify the specific claim or hypothesis to be tested and put it in symbolic form.
2. Write the symbolic notation that must be true when the original claim is false.
3. If the test statistic is normally distributed or if the sampling distribution is the standard normal distribution, identify the test statistic as  $Z$  or  $t$ . List the null hypothesis as the symbolic expression that the parameter against the claim is being considered.
4. Select the significance level  $\alpha$  based on the conditions of the test. If there is a graph and/or the consequences of rejecting or not rejecting the null hypothesis are given, use  $\alpha = 0.05$  and  $0.01$  as your answer.
5. Identify the statistical test procedure to use and determine the sampling distribution (such as normal,  $t$ , or  $F$ ).
6. Find the test statistic, the critical values, and the critical region. There is a graph and/or the test statistic or critical values and/or critical region are given.
7. Reject  $H_0$  if the test statistic is in the critical region.
8. Fail to reject  $H_0$  if the test statistic is not in the critical region.
9. Revise the symbolic notation to reflect the statistical test and address the original claim.

## Comprehensive Hypothesis Test

---

---

---

---

---

---

---

---

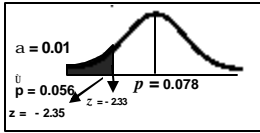
---

---

**Example:** It was found that 821 crashes of midsize cars equipped with air bags, 46 of the crashes resulted in hospitalization of the drivers. Using the 0.01 significance level, test the claim that the air bag hospitalization is lower than the 7.8% rate for cars with automatic safety belts.

Claim:  $p < 0.078$        $\hat{p} = 46 / 821 = 0.0560$   
 reject  $H_0$        $H_0: p = 0.078$   
                    $H_1: p < 0.078$

$$Z = \frac{\hat{p} - p}{\sqrt{\frac{pq}{n}}} = \frac{0.056 - 0.078}{\sqrt{\frac{(0.078)(0.922)}{821}}} \approx -2.35$$



There is sufficient evidence to support claim that the air bag hospitalization rate is lower than the 7.8% rate for automatic safety belts.

---

---

---

---

---

---

---

---

---

---

---

---

## 8-5

### Testing a Claim about a Mean: S Not Known

---

---

---

---

---

---

---

---

---

---

---

---

**Example:** Seven axial load scores are listed below. At the 0.01 level of significance, test the claim that this sample comes from a population with a mean that is greater than 165 lbs.

270 273 258 204 254 228 282

$n = 7$      $df = 6$

$\bar{x} = 252.7$  lb

$s = 27.6$  lb

Claim:  $\mu > 165$  lb

$H_0: \mu = 165$  lb

$H_1: \mu > 165$  lb

(right tailed test)

---

---

---

---

---

---

---

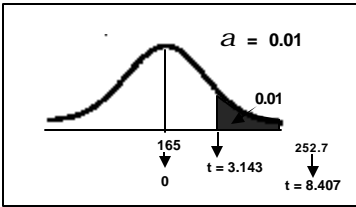
---

---

---

---

---



$$t = \frac{\bar{x} - \mu_{\bar{x}}}{s/\sqrt{n}} = \frac{252.7 - 165}{27.6/\sqrt{7}} = 8.407$$

**Reject  $H_0$**

---

---

---

---

---

---

---

---

---

---

**Example:** Seven axial load scores are listed below. At the 0.01 level of significance, test the claim that this sample comes from a population with a mean that is greater than 165 lbs.

270 273 258 204 254 228 282

**Final conclusion:**

There is sufficient evidence to support the claim that the sample comes from a population with a mean greater than 165 lbs.

**Claim:  $\mu > 165$  lb**

**Reject  $H_0: \mu = 165$  lb**

**$H_1: \mu > 165$  lb  
(right tailed test)**

---

---

---

---

---

---

---

---

---

---

## 8-6

### Testing a Claim about a Standard Deviation or Variance

---

---

---

---

---

---

---

---

---

---

# Chi-Square Distribution

## Test Statistic

$$X^2 = \frac{(n - 1) s^2}{S^2}$$

$n$  = sample size

$s^2$  = sample variance

$S^2$  = population variance  
(given in null hypothesis)

---

---

---

---

---

---

---

---

# Critical Values and P-values for Chi-Square Distribution

- ❖ Found in Table A-4
- ❖ Degrees of freedom =  $n - 1$
- ❖ Based on cumulative areas from the RIGHT

---

---

---

---

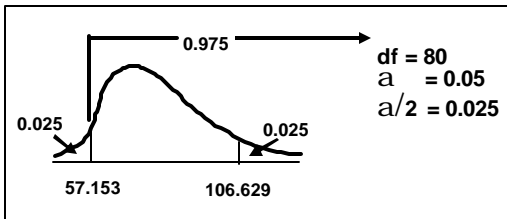
---

---

---

---

**Table A-4: Critical values are found by determining the area to the RIGHT of the critical value.**



---

---

---

---

---

---

---

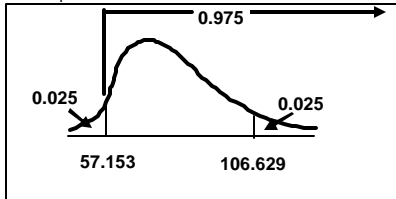
---

**Example:** Aircraft altimeters have measuring errors with a standard deviation of 43.7 ft. With new production equipment, 81 altimeters measure errors with a standard deviation of 52.3 ft. Use the 0.05 significance level to test the claim that the new altimeters have a standard deviation different from the old value of 43.7 ft.

Claim:  $s \neq 43.7$

$H_0: s = 43.7$      $\alpha = 0.05$      $\alpha/2 = 0.025$

$H_1: s \neq 43.7$



$n = 81$   
 $df = 80$   
 Table A-4

---

---

---

---

---

---

---

---

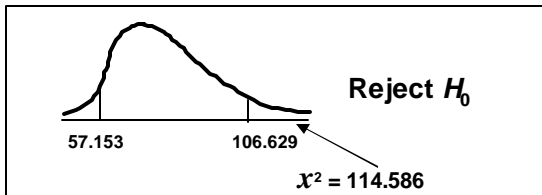
---

---

---

---

$$\chi^2 = \frac{(n-1)s^2}{S^2} = \frac{(81-1)(52.3)^2}{43.7^2} \gg 114.586$$




---

---

---

---

---

---

---

---

---

---

---

---

**Example:** Aircraft altimeters have measuring errors with a standard deviation of 43.7 ft. With new production equipment, 81 altimeters measure errors with a standard deviation of 52.3 ft. Use the 0.05 significance level to test the claim that the new altimeters have a standard deviation different from the old value of 43.7 ft.

**SUPPORT** Claim:  $s \neq 43.7$

**REJECT**  $H_0: s = 43.7$

$H_1: s \neq 43.7$

The new production method appears to be worse than the old method. The data supports that there is more variation in the error readings than before.

---

---

---

---

---

---

---

---

---

---

---

---

Table 8-3	Hypothesis Tests		
Parameter	Conditions	Distribution and Test Statistic	Critical and P-values
Proportion	np = 5 and nq = 5	Normal: $z = \frac{\hat{p} - p}{\sqrt{\frac{pq}{n}}}$	Table A-2
Mean	$\sigma$ not known and normally distributed or n = 30	Student t: $t = \frac{\bar{x} - \mu}{\frac{s}{\sqrt{n}}}$	Table A-3
Standard Deviation or Variance	Population normally distributed	Chi-Square: $\chi^2 = \frac{(n-1)s^2}{\sigma^2}$	Table A-4

Final Review. Triola, Essentials of Statistics, Third Edition. Copyright 2008. Pearson Education, Inc.

---

---

---

---

---

---

---

---

---

---

---

---

# Chapter 10

## Correlation and Regression

Final Review. Triola, Essentials of Statistics, Third Edition. Copyright 2008. Pearson Education, Inc.

---

---

---

---

---

---

---

---

---

---

---

---

## Overview Paired Data

- ❖ is there a relationship
- ❖ if so, what is the equation
- ❖ use the equation for prediction

Final Review. Triola, Essentials of Statistics, Third Edition. Copyright 2008. Pearson Education, Inc.

---

---

---

---

---

---

---

---

---

---

---

---

## Definition

- ❖ **Correlation**  
exists between two variables  
when one of them is related to  
the other in some way

---

---

---

---

---

---

---

---

## Definition

- ❖ **Scatterplot (or scatter diagram)**  
is a graph in which the paired  
( $x,y$ ) sample data are plotted with  
a horizontal  $x$  axis and a vertical  $y$   
axis. Each individual ( $x,y$ ) pair is  
plotted as a single point.

---

---

---

---

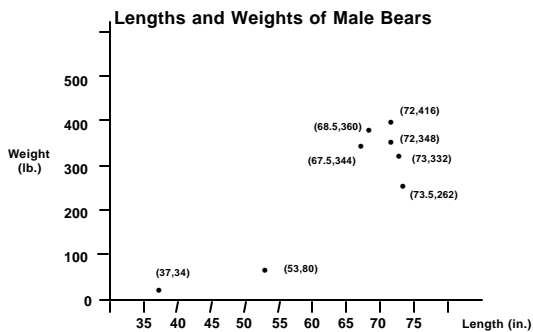
---

---

---

---

## Scatter Diagram of Paired Data



---

---

---

---

---

---

---

---

## Positive Linear Correlation

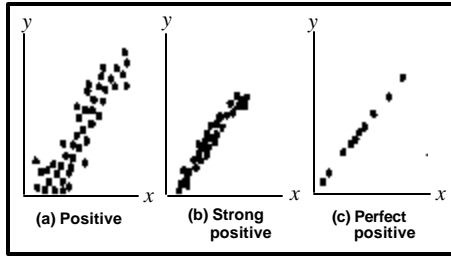


Figure 10-2 Scatter Plots

Final Review. Triola, Essentials of Statistics, Third Edition. Copyright 2008. Pearson Education, Inc.

14

---

---

---

---

---

---

---

---

## Negative Linear Correlation

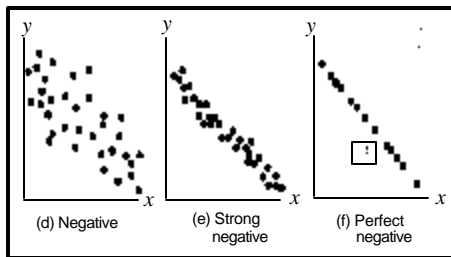


Figure 10-2 Scatter Plots

Final Review. Triola, Essentials of Statistics, Third Edition. Copyright 2008. Pearson Education, Inc.

14

---

---

---

---

---

---

---

---

## No Linear Correlation

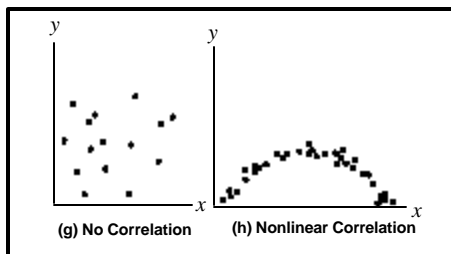


Figure 10-2 Scatter Plots

Final Review. Triola, Essentials of Statistics, Third Edition. Copyright 2008. Pearson Education, Inc.

14

---

---

---

---

---

---

---

---

## Definition

### ❖ Linear Correlation Coefficient $r$

measures **strength** of the linear relationship between paired  $x$ - and  $y$ -quantitative values in a sample

---

---

---

---

---

---

---

---

## Definition

### Linear Correlation Coefficient $r$

$$r = \frac{nS_{xy} - (S_x)(S_y)}{\sqrt{n(S_x^2) - (S_x)^2} \sqrt{n(S_y^2) - (S_y)^2}}$$

Formula 10-1

**Calculators can compute  $r$**

$r$  ( $\rho$ ) is the linear correlation coefficient for **all** paired data in the population.

---

---

---

---

---

---

---

---

## Rounding the Linear Correlation Coefficient $r$

- ❖ Round to three decimal places so that it can be compared to critical values in Table A-5
- ❖ Use calculator or computer if possible

---

---

---

---

---

---

---

---

## Interpreting the Linear Correlation Coefficient

- ❖ If the absolute value of  $r$  exceeds the value in Table A - 5, conclude that there is a significant linear correlation.
- ❖ Otherwise, there is not sufficient evidence to support the conclusion of significant linear correlation.

---

---

---

---

---

---

---

---

---

---

**TABLE A-5 Critical Values of the Pearson Correlation Coefficient  $r$**

$n$	$\alpha = .05$	$\alpha = .01$
4	.950	.999
5	.878	.959
6	.811	.917
7	.754	.875
8	.707	.834
9	.666	.798
10	.632	.765
11	.602	.735
12	.576	.708
13	.553	.684
14	.532	.661
15	.514	.641
16	.497	.623
17	.482	.606
18	.468	.590
19	.456	.575
20	.444	.561
25	.396	.505
30	.361	.463
35	.335	.430
40	.312	.402
45	.294	.378
50	.279	.361
60	.254	.330
70	.236	.305
80	.220	.286
90	.207	.269
100	.196	.256

---

---

---

---

---

---

---

---

---

---

## Properties of the Linear Correlation Coefficient $r$

1.  $-1 \leq r \leq 1$
2. Value of  $r$  does not change if all values of either variable are converted to a different scale.
3. The value of  $r$  is not affected by the choice of  $x$  and  $y$ . Interchange  $x$  and  $y$  and the value of  $r$  will not change.
4.  $r$  measures strength of a linear relationship.

---

---

---

---

---

---

---

---

---

---

## Formal Hypothesis Test

- ❖ To determine whether there is a significant linear correlation between two variables
- ❖ Two methods
- ❖ Both methods let  $H_0: r = 0$   
(no significant linear correlation)  
 $H_1: r \neq 0$   
(significant linear correlation)

Final Review, Triola, Essentials of Statistics, Third Edition, Copyright 2008, Pearson Education, Inc.

15

---

---

---

---

---

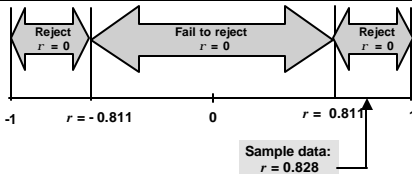
---

---

---

## Method 2: Test Statistic is $r$ (uses fewer calculations)

- ❖ Test statistic:  $r$
- ❖ Critical values: Refer to Table A-5  
(no degrees of freedom)



Final Review, Triola, Essentials of Statistics, Third Edition, Copyright 2008, Pearson Education, Inc.

15

---

---

---

---

---

---

---

---

## Is there a significant linear correlation?

Data from the Garbage Project

x Plastic (lb)	0.27	1.41	2.19	2.83	2.19	1.81	0.85	3.05
y Household	2	3	3	6	4	2	1	5

$$n = 8 \quad \alpha = 0.05 \quad H_0: \rho = 0$$

$$H_1: \rho \neq 0$$

Test statistic is  $r = 0.842$

Final Review, Triola, Essentials of Statistics, Third Edition, Copyright 2008, Pearson Education, Inc.

15

---

---

---

---

---

---

---

---



# Regression

## Definition

### ❖ Regression Equation

Given a collection of paired data, the regression equation

$$\hat{y} = b_0 + b_1x$$

algebraically describes the relationship between the two variables

### ❖ Regression Line

(line of best fit or least-squares line)

the graph of the regression equation

---

---

---

---

---

---

---

---

## The Regression Equation

$x$  is the independent variable  
(predictor variable)

$\hat{y}$  is the dependent variable  
(response variable)

$\hat{y} = b_0 + b_1x$	$b_0 = y$ - intercept
$y = mx + b$	$b_1 =$ slope

---

---

---

---

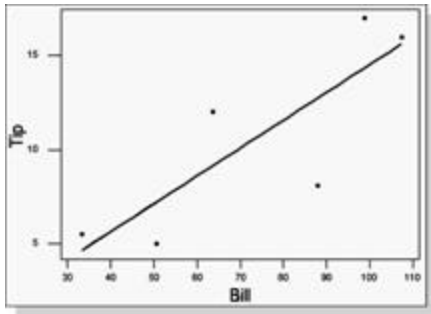
---

---

---

---

## Regression Line Plotted on Scatter Plot



---

---

---

---

---

---

---

---

## Formula for $b_1$ and $b_0$

Formula 10-2  $b_1 = \frac{n(\sum xy) - (\sum x)(\sum y)}{n(\sum x^2) - (\sum x)^2}$  (slope)

Formula 10-3  $b_0 = \bar{y} - b_1\bar{x}$  (y-intercept)

**calculators or computers can compute these values**

---

---

---

---

---

---

---

---

## Rounding the y-intercept $b_0$ and the slope $b_1$

- ❖ Round to three significant digits
- ❖ If you use the formulas 10-2, 10-3, try not to round intermediate values or carry to at least six significant digits.

---

---

---

---

---

---

---

---

## Example: Lengths and Weights of Male Bears

x Length (in.) 53.0 67.5 72.0 72.0 73.5 68.5 73.0 37.0

y Weight (lb) 80 344 416 348 262 360 332 34

$$b_0 = -352 \text{ (rounded)}$$

$$b_1 = 9.66 \text{ (rounded)}$$

$$\hat{y} = -352 + 9.66x$$

---

---

---

---

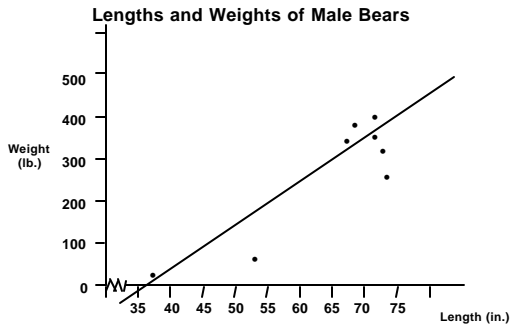
---

---

---

---

## Scatter Diagram of Paired Data



Final Review. Triola, Essentials of Statistics, Third Edition. Copyright 2008. Pearson Education, Inc.

16

---

---

---

---

---

---

---

---

## Predictions

In predicting a value of  $y$  based on some given value of  $x$  ...

1. If there is not a significant linear correlation, the best predicted  $y$ -value is  $\bar{y}$ .
2. If there is a significant linear correlation, the best predicted  $y$ -value is found by substituting the  $x$ -value into the regression equation.

Final Review. Triola, Essentials of Statistics, Third Edition. Copyright 2008. Pearson Education, Inc.

16

---

---

---

---

---

---

---

---

## Guidelines for Using The Regression Equation

1. If there is no significant linear correlation, don't use the regression equation to make predictions.
2. When using the regression equation for predictions, stay within the scope of the available sample data.
3. A regression equation based on old data is not necessarily valid now.
4. Don't make predictions about a population that is different from the population from which the sample data was drawn.

Final Review. Triola, Essentials of Statistics, Third Edition. Copyright 2008. Pearson Education, Inc.

16

---

---

---

---

---

---

---

---

**Example: Lengths and Weights of Male Bears**

x Length (in.) 53.0 67.5 72.0 72.0 73.5 68.5 73.0 37.0

y Weight (lb.) 80 344 416 348 262 360 332 34

$$\hat{y} = -352 + 9.66x$$

What is the weight of a bear that is 60 inches long?

Since the data does have a significant positive linear correlation, we can use the regression equation for prediction.

Final Review. Triola, Essentials of Statistics, Third Edition. Copyright 2008. Pearson Education, Inc.

---

---

---

---

---

---

---

---

**Example: Lengths and Weights of Male Bears**

x Length (in.) 53.0 67.5 72.0 72.0 73.5 68.5 73.0 37.0

y Weight (lb.) 80 344 416 348 262 360 332 34

$$\hat{y} = -352 + 9.66(60)$$

$$\hat{y} = 227.6 \text{ pounds}$$

Final Review. Triola, Essentials of Statistics, Third Edition. Copyright 2008. Pearson Education, Inc.

---

---

---

---

---

---

---

---

**Example: Lengths and Weights of Male Bears**

x Length (in.) 53.0 67.5 72.0 72.0 73.5 68.5 73.0 37.0

y Weight (lb.) 80 344 416 348 262 360 332 34

**A bear that is 60 inches long will weigh approximately 227.6 pounds.**

Final Review. Triola, Essentials of Statistics, Third Edition. Copyright 2008. Pearson Education, Inc.

---

---

---

---

---

---

---

---

### Example: Lengths and Weights of Male Bears

x Length (in.) 53.0 67.5 72.0 72.0 73.5 68.5 73.0 37.0

y Weight (lb.) 80 344 416 348 262 360 332 34

If there were no significant linear correlation, to predict a weight for any length:

use the average of the weights (y-values)

$$\bar{y} = 272 \text{ lbs}$$

---

---

---

---

---

---

---

---

## Chapter 11 Multinomial Experiments And Contingency Tables

---

---

---

---

---

---

---

---

## 11-2 Multinomial Experiments

---

---

---

---

---

---

---

---

## Definition

### Goodness-of-fit test

used to test the hypothesis that an observed frequency distribution fits (or conforms to) some claimed distribution

---

---

---

---

---

---

---

---

## Goodness-of-Fit Test

### Notation

$O$  represents the observed frequency of an outcome

$E$  represents the expected frequency of an outcome

$k$  represents the number of different categories or outcomes

$n$  represents the total number of trials

---

---

---

---

---

---

---

---

## Expected Frequencies

If all expected frequencies are equal:

$$E = \frac{n}{k}$$

the sum of all observed frequencies divided by the number of categories

---

---

---

---

---

---

---

---

## Expected Frequencies

If all expected frequencies are not all equal:

$$E = n p$$

each expected frequency is found by multiplying the sum of all observed frequencies by the probability for the category

---

---

---

---

---

---

---

---

## Key Question

We need to measure the discrepancy between O and E; the test statistic will involve their difference:

$$O - E$$

---

---

---

---

---

---

---

---

## Test Statistic

$$X^2 = \sum \frac{(O - E)^2}{E}$$

### Critical Values

1. Found in Table A-4 using k-1 degrees of freedom  
where k = number of categories
2. Goodness-of-fit hypothesis tests are always right-tailed.

---

---

---

---

---

---

---

---

## Multinomial Experiment: Goodness-of-Fit Test

$H_0$ : No difference between  
observed and expected  
probabilities

$H_1$ : at least one of the  
probabilities is different  
from the others

---

---

---

---

---

---

---

---

## Categories with Equal Frequencies

(Probabilities)

$H_0$ :  $p_1 = p_2 = p_3 = \dots = p_k$

$H_1$ : at least one of the probabilities is  
different from the others

---

---

---

---

---

---

---

---

**Example:** A study was made of 147 industrial accidents that required medical attention. Test the claim that the accidents occur with equal proportions on the 5 workdays.

Frequency of Accidents					
Day	Mon	Tues	Wed	Thurs	Fri
Observed accidents	31	42	18	25	31

**Claim:** Accidents occur with the same proportion (frequency); that is,  $p_1 = p_2 = p_3 = p_4 = p_5$

$H_0$ :  $p_1 = p_2 = p_3 = p_4 = p_5$

$H_1$ : At least 1 of the 5 proportions is different from others

---

---

---

---

---

---

---

---

**Example:** A study was made of 147 industrial accidents that required medical attention. Test the claim that the accidents occur with equal proportions on the 5 workdays.

Frequency of Accidents					
Day	Mon	Tues	Wed	Thurs	Fri
Observed accidents	31	42	18	25	31

$$E = n/k = 147/5 = 29.4$$

Observed and Expected Frequencies					
Day	Mon	Tues	Wed	Thurs	Fri
O: Observed accidents	31	42	18	25	31
E: Expected accidents	29.4	29.4	29.4	29.4	29.4

Final Review, Triola, Essentials of Statistics, Third Edition, Copyright 2008, Pearson Education, Inc.

18

---

---

---

---

---

---

---

---

---

---

---

---

Observed and Expected Frequencies of Industrial Accidents					
Day	Mon	Tues	Wed	Thurs	Fri
Observed accidents	31	42	18	25	31
Expected accidents	29.4	29.4	29.4	29.4	29.4
$(O - E)^2/E$	0.0871	5.4000	4.4204	0.6585	0.0871 (rounded)

**Test Statistic:**

$$\chi^2 = \sum \frac{(O - E)^2}{E} = 0.0871 + 5.4000 + 4.4204 + 0.6585 + 0.0871 = 10.6531$$

**Critical Value:  $\chi^2 = 9.488$**

**Table A-4 with  $k-1 = 5 - 1 = 4$   
and  $\alpha = 0.05$**

Final Review, Triola, Essentials of Statistics, Third Edition, Copyright 2008, Pearson Education, Inc.

18

---

---

---

---

---

---

---

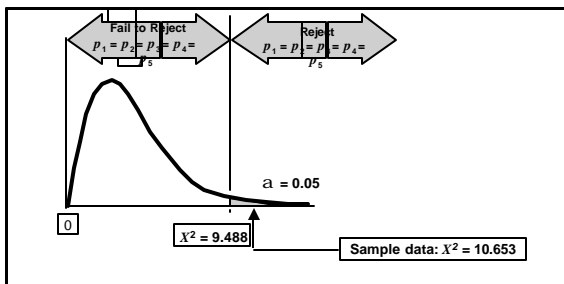
---

---

---

---

---



Test Statistic falls within the critical region: **REJECT** the null hypothesis

Claim: Accidents occur with the same proportion (frequency);  
that is,  $p_1 = p_2 = p_3 = p_4 = p_5$

$H_0$ :  $p_1 = p_2 = p_3 = p_4 = p_5$

$H_1$ : **At least 1 of the 5 proportions is different from others**

Final Review, Triola, Essentials of Statistics, Third Edition, Copyright 2008, Pearson Education, Inc.

18

---

---

---

---

---

---

---

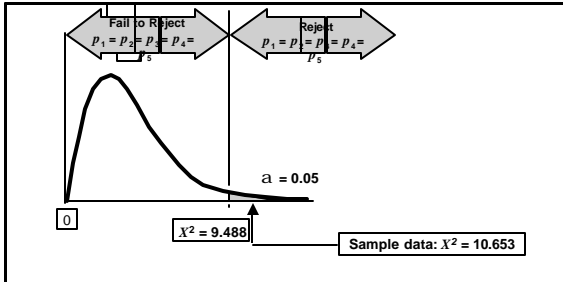
---

---

---

---

---



Test Statistic falls within the critical region: REJECT the null hypothesis

We reject claim that the accidents occur with equal proportions (frequency) on the 5 workdays. (Although it appears Wednesday has a lower accident rate, arriving at such a conclusion would require other methods of analysis.)

---

---

---

---

---

---

---

---

## Categories with Unequal Frequencies

(Probabilities)

$H_0$ :  $p_1, p_2, p_3, \dots, p_k$  are as claimed

$H_1$ : at least one of the above proportions is different from the claimed value

---

---

---

---

---

---

---

---

**Example:** Mars, Inc. claims its M&M candies are distributed with the color percentages of 30% brown, 20% yellow, 20% red, 10% orange, 10% green, and 10% blue. At the 0.05 significance level, test the claim that the color distribution is as claimed by Mars, Inc.

**Claim:**  $p_1 = 0.30, p_2 = 0.20, p_3 = 0.20, p_4 = 0.10, p_5 = 0.10, p_6 = 0.10$

$H_0$ :  $p_1 = 0.30, p_2 = 0.20, p_3 = 0.20, p_4 = 0.10, p_5 = 0.10, p_6 = 0.10$

$H_1$ : At least one of the proportions is different from the claimed value.

---

---

---

---

---

---

---

---

**Example:** Mars, Inc. claims its M&M candies are distributed with the color percentages of 30% brown, 20% yellow, 20% red, 10% orange, 10% green, and 10% blue. At the 0.05 significance level, test the claim that the color distribution is as claimed by Mars, Inc.

Frequencies of M&Ms						
	Brown	Yellow	Red	Orange	Green	Blue
Observed frequency	33	26	21	8	7	5

$n = 100$

Brown  $E = np = (100)(0.30) = 30$   
 Yellow  $E = np = (100)(0.20) = 20$   
 Red  $E = np = (100)(0.20) = 20$   
 Orange  $E = np = (100)(0.10) = 10$   
 Green  $E = np = (100)(0.10) = 10$   
 Blue  $E = np = (100)(0.10) = 10$

---

---

---

---

---

---

---

---

---

---

Frequencies of M&Ms						
	Brown	Yellow	Red	Orange	Green	Blue
Observed frequency	33	26	21	8	7	5
Expected frequency	30	20	20	10	10	10
$(O - E)^2/E$	0.3	1.8	0.05	0.4	0.9	2.5

Test Statistic  

$$X^2 = \sum \frac{(O - E)^2}{E} = 5.95$$

Critical Value  $X^2 = 11.071$   
 (with  $k-1 = 5$  and  $\alpha = 0.05$ )

---

---

---

---

---

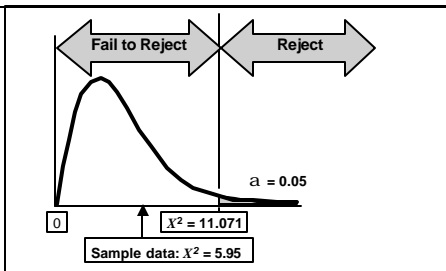
---

---

---

---

---



Test Statistic does not fall within critical region;  
 Fail to reject  $H_0$ : percentages are as claimed  
 There is not sufficient evidence to warrant rejection of the claim that the colors are distributed with the given percentages.

---

---

---

---

---

---

---

---

---

---

# 11-3 Contingency Tables

---

---

---

---

---

---

---

---

## Definition

- ❖ **Contingency Table** (or two-way frequency table)  
a table in which frequencies correspond to two variables.  
(One variable is used to categorize rows, and a second variable is used to categorize columns.)

**Contingency tables have at least two rows and at least two columns.**

---

---

---

---

---

---

---

---

## Definition

- ❖ **Test of Independence**  
tests the null hypothesis that there is no association between the row variable and the column variable.  
(The null hypothesis is the statement that the row and column variables are independent.)

---

---

---

---

---

---

---

---

## Tests of Independence

$H_0$ : The row variable is independent of the column variable

$H_1$ : The row variable is dependent (related to) the column variable

This procedure cannot be used to establish a direct cause-and-effect link between variables in question.

Dependence means only there is a relationship between the two variables.

---

---

---

---

---

---

---

---

## Test of Independence Test Statistic

$$X^2 = \sum \frac{(O - E)^2}{E}$$

### Critical Values

1. Found in Table A-4 using degrees of freedom =  $(r - 1)(c - 1)$   
 $r$  is the number of rows and  $c$  is the number of columns
2. Tests of Independence are always right-tailed.

---

---

---

---

---

---

---

---

$$E = \frac{(\text{row total})(\text{column total})}{(\text{grand total})}$$



Total number of all observed frequencies in the table

---

---

---

---

---

---

---

---

Is the type of crime independent of whether the criminal is a stranger?

	Homicide	Robbery	Assault	Row Total
Stranger	12	379	727	1118
Acquaintance or Relative	39	106	642	787
Column Total	51	485	1369	1905

$H_0$ : Type of crime is independent of knowing the criminal

$H_1$ : Type of crime is dependent with knowing the criminal

---

---

---

---

---

---

---

---

---

---

---

---

Is the type of crime independent of whether the criminal is a stranger?

	Homicide	Robbery	Assault	Row Total
Stranger	12 (29.93)	379 (284.64)	727 (803.43)	1118
Acquaintance or Relative	39 (21.07)	106 (200.36)	642 (565.57)	787
Column Total	51	485	1369	1905

$$E = \frac{(\text{row total})(\text{column total})}{(\text{grand total})}$$

$$E = \frac{(1118)(51)}{1905} = 29.93 \quad E = \frac{(1118)(485)}{1905} = 284.64$$

*etc.*

---

---

---

---

---

---

---

---

---

---

---

---

Is the type of crime independent of whether the criminal is a stranger?

$$\chi^2 = \sum \frac{(O - E)^2}{E}$$

	Homicide	Robbery	Forgery
Stranger	12 (29.93) [10.741]	379 (284.64) [31.281]	727 (803.43) [7.271]
Acquaintance or Relative	39 (21.07) [15.258]	106 (200.36) [44.439]	642 (565.57) [10.329]

$$\frac{(O - E)^2}{E}$$

$$\text{Upper left cell: } \frac{(O - E)^2}{E} = \frac{(12 - 29.93)^2}{29.93} = 10.741$$

---

---

---

---

---

---

---

---

---

---

---

---

Is the type of crime independent of whether the criminal is a stranger?

$$\chi^2 = \sum \frac{(O - E)^2}{E}$$

	Homicide	Robbery	Forgery	(E)
Stranger	12 (29.93) [10.741]	379 (284.64) [31.281]	727 (803.43) [7.271]	$\left[ \frac{(O - E)^2}{E} \right]$
Acquaintance or Relative	39 (21.07) [15.258]	106 (200.36) [44.439]	642 (565.57) [10.329]	

Test Statistic  $\chi^2 = 10.741 + 31.281 + \dots + 10.329 = 119.319$

Final Review, Triola, Essentials of Statistics, Third Edition, Copyright 2008, Pearson Education, Inc. 19

---

---

---

---

---

---

---

---

---

---

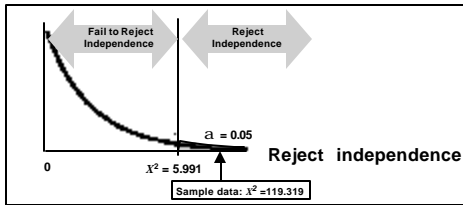
---

---

Test Statistic:  $\chi^2 = 119.319$

with  $\alpha = 0.05$  and  $(r - 1)(c - 1) = (2 - 1)(3 - 1) = 2$  degrees of freedom

Critical Value:  $\chi^2 = 5.991$  (from Table A-4)



$H_0$  : The type of crime and knowing the criminal are independent  
 $H_a$  : The type of crime and knowing the criminal are dependent

Final Review, Triola, Essentials of Statistics, Third Edition, Copyright 2008, Pearson Education, Inc. 20

---

---

---

---

---

---

---

---

---

---

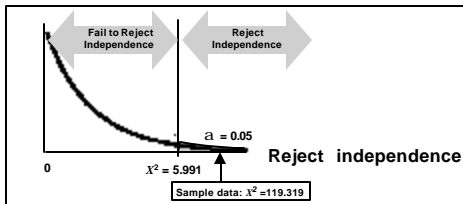
---

---

Test Statistic:  $\chi^2 = 119.319$

with  $\alpha = 0.05$  and  $(r - 1)(c - 1) = (2 - 1)(3 - 1) = 2$  degrees of freedom

Critical Value:  $\chi^2 = 5.991$  (from Table A-4)



It appears that the type of crime and knowing the criminal are related.

Final Review, Triola, Essentials of Statistics, Third Edition, Copyright 2008, Pearson Education, Inc. 20

---

---

---

---

---

---

---

---

---

---

---

---

# Definition

## Test of Homogeneity

tests the claim that *different populations* have the same proportions of some characteristics

---

---

---

---

---

---

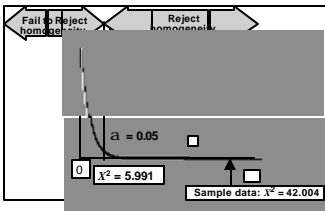
---

---

## Example - Test of Homogeneity

		New York	Chicago	Pittsburgh
Taxi has usable seat belt?	Yes	3	42	2
	No	74	87	70

Claim: The 3 cities have the same proportion of taxis with usable seat belts  
 $H_0$ : The 3 cities have the same proportion of taxis with usable seat belts  
 $H_a$ : The proportion of taxis with usable seat belts is not the same in all 3 cities



There is sufficient evidence to warrant rejection of the claim that the 3 cities have the same proportion of usable seat belts in taxis; appears from Table Chicago has a much higher proportion.

---

---

---

---

---

---

---

---



---

---

---

---

---

---

---

---